



Term I Examination – 2022-2023

Name: _____

Grade: I _____

Subject: Maths

Date: 14-10-2022

Time: 3 hrs

Marks obtained:
Total:50

I. Write true or false

(5 X1=5)

1. Giraffe is shorter than the elephant. _____

2. Putting together is known as addition. _____

3. 9 comes one before 8 _____

4. Taking away is known as subtraction. _____

5. An egg is oval in shape. _____

II. Fill in the blanks

(5 X1=5)

6. $3 + 4 =$ _____

7. A triangle has _____ sides.

8. $7 - 4 =$ _____

9. A circle has _____ corners.

10. $10 + 0 =$ _____

III. Sort the letters

(1X5=5)

11.


A M O C P F N X B J

Having straight lines only	
Having curved lines only	
Having curved and straight lines	

IV. Identify the correct shape and circle

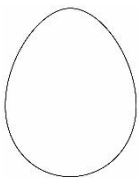
(5 X1=5)

12.



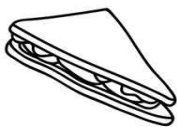
Triangle / Square

13.




Oval / Circle

14.



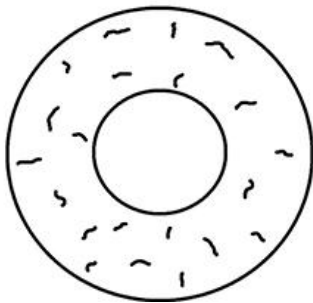
Rectangle / Triangle

15.



Rectangle / Square

16.



Oval / Circle

V. Answer the following

(4X5=20)

17. Create addition and subtraction facts using given numbers.

3	4	7

18. Draw objects of your choice to subtract the following numbers.

a. 9 - 7 _____ _____	
b. 6 - 4 _____ _____	

19. Colour the cards whose numbers add up to 9.

$7 + 2$

$2 + 3$ $1 + 2$ $4 + 5$

$1 + 8$ $3 + 4$ $5 + 1$

$6 + 3$

20.

a. Kavitha has 10 beads 4 of them fall on the floor. How many beads she have in her hand now?

Number of beads Kavitha has	=
Number of beads that fall on the floor	=
Number of beads remaining	=

b.

Anjali has 5 frocks. Her parents brought 3 more frocks on her birthday. How many does she have in total?

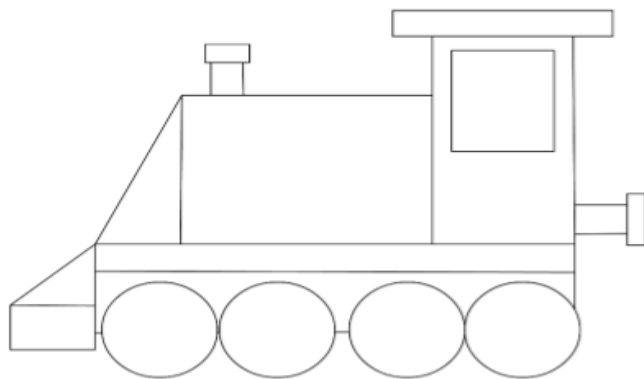
Number of frocks Anjali has	=
Number of frocks her parents bought	=
Total number of frocks	=

vi. Answer the following

(5 X2=10)

21. Identify the 2-D shapes in the given picture.

1. Colour rectangles with blue.
2. Circles with green.
3. Squares with violet.
4. Triangles with yellow.



22. Subtract and colour the picture.

Color Code							
Light blue	3	Yellow	4	Orange	5	Green	2

